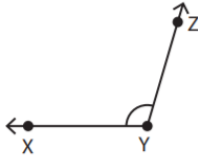


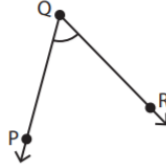
Naming Angles using Three Points

Use all the three points and name each angle.

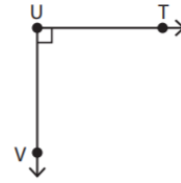
1)



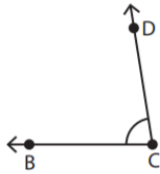
2)



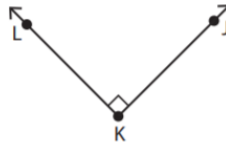
3)



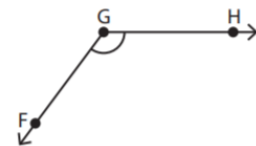
4)



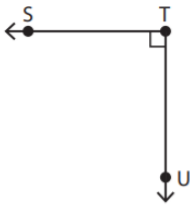
5)



6)



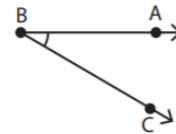
7)



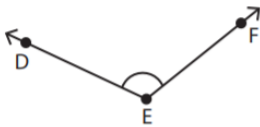
8)



9)



10)



11)



12)

